

OXFORD CAMBRIDGE AND RSA EXAMINATIONS

Advanced GCE

CHEMISTRY

Trends and Patterns

2815/01

Tuesday

25 JUNE 2002

Morning

1 hour

Candidates answer on the question paper.

Additional materials:

Data sheet for Chemistry

Scientific calculator

Candidate Name

Centre Number

Candidate
Number

--	--	--	--	--	--	--	--

TIME 1 hour

INSTRUCTIONS TO CANDIDATES

- Write your name in the space above.
- Write your Centre number and Candidate number in the boxes above.
- Answer **all** the questions.
- Write your answers in the spaces on the question paper.
- Read each question carefully and make sure you know what you have to do before starting your answer.

INFORMATION FOR CANDIDATES

- The number of marks is given in brackets [] at the end of each question or part question.
- You will be awarded marks for the quality of written communication where this is indicated in the question.
- You may use a scientific calculator.
- You may use the *Data Sheet for Chemistry*.
- You are advised to show all the steps in any calculations.

FOR EXAMINER'S USE		
Question Number	Mark	Mark
1	11	
2	5	
3	13	
4	5	
5	11	
TOTAL	45	

This question paper consists of 8 printed pages.

Answer **all** questions.

- 1 (a) (i) Explain what is meant by the term *transition element*.

.....
.....[1]

- (ii) Complete the electronic configuration of the vanadium atom.

$1s^22s^22p^6$[1]

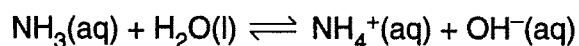
- (b) Aqueous transition metal ions can react with aqueous hydroxide ions.

- (i) Complete the table below.

metal ion	formula and state symbol of the product of the reaction with $\text{OH}^-(\text{aq})$	colour of product
$\text{Fe}^{2+}(\text{aq})$		
$\text{Fe}^{3+}(\text{aq})$		

[5]

- (ii) Aqueous ammonia reacts with water in the following way.



When aqueous ammonia is added dropwise to aqueous copper(II) ions, a very pale blue precipitate is observed which disappears in excess ammonia to give a deep blue solution.

Write equations to show the formation from aqueous copper(II) ions of
the pale blue precipitate,

.....

the deep blue solution.

.....[4]

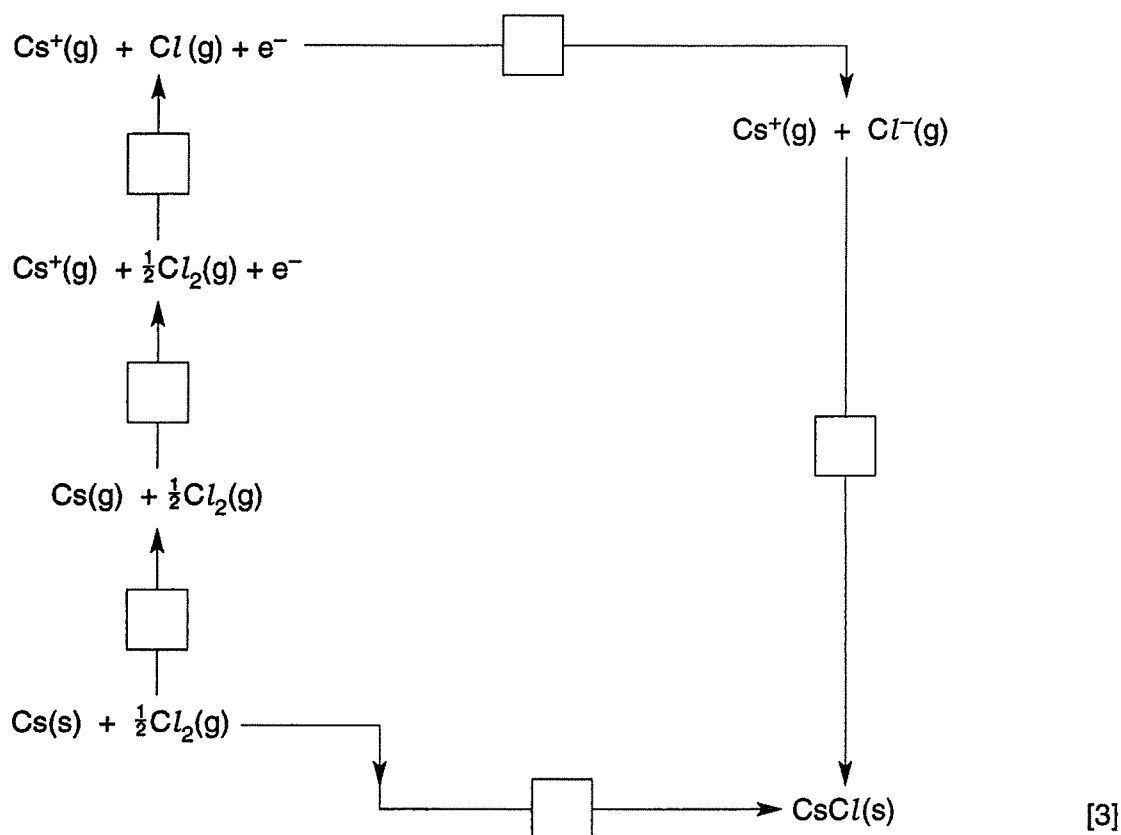
[Total : 11]

3 The lattice enthalpy of caesium chloride, CsCl , can be calculated using a Born-Haber cycle.

The table below shows the enthalpy changes and corresponding data for this cycle.

enthalpy change		energy/ kJ mol^{-1}
lattice enthalpy of CsCl	A	?
atomisation of caesium	B	+76
atomisation of chlorine	C	+122
1st ionisation energy of caesium	D	+376
1st electron affinity of chlorine	E	-349
formation of CsCl	F	-443

(a) On the cycle below, put the letter for each enthalpy change in the appropriate box.



(b) Calculate the lattice enthalpy of caesium chloride.

Answer kJ mol^{-1} [2]

- (c) The lattice enthalpy of sodium chloride is **more exothermic** than the lattice enthalpy of caesium chloride.

State and explain the relative strengths of the ionic bonding in sodium chloride and caesium chloride.

.....
.....
.....
.....[3]

- ~~(d) What would you expect to observe when solid caesium chloride is added to water?~~

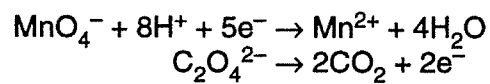
~~.....
.....
.....[2]~~

- ~~(e) Describe how you would distinguish between aqueous caesium chloride and aqueous caesium iodide using a simple laboratory test. State the observations you would make.~~

~~.....
.....
.....
.....[3]~~

[Total : 13]

- 4 The manganate(VII) ion, MnO_4^- , is a strong oxidising agent frequently used in laboratory analysis. It reacts with the ethanedioate ion, $\text{C}_2\text{O}_4^{2-}$, in hot acidic solution to form CO_2 and Mn^{2+} ions.



- (a) Construct the full ionic equation for this reaction.

[2]

- (b) Calculate the volume of $0.0200 \text{ mol dm}^{-3}$ potassium manganate(VII) required to react with 25.0 cm^3 of $0.0400 \text{ mol dm}^{-3}$ sodium ethanedioate.

[3]

[Total : 5]

Answer all questions.

1 Copper forms a number of complex ions.

(a) State the co-ordination number and oxidation state of copper in $[\text{CuCl}_4]^{2-}$.

co-ordination number[1]

oxidation state[1]

(b) Complete the following table.

	$[\text{Cu}(\text{NH}_3)_4(\text{H}_2\text{O})_2]^{2+}$	$[\text{Cu}(\text{H}_2\text{O})_6]^{2+}$	$[\text{CuCl}_4]^{2-}$
colour			
shape			

[6]

(c) One of these ions strongly absorbs light in the blue/violet region of the spectrum at wavelengths of 400–450 nm.

(i) Suggest the identity of this ion.

.....[1]

(ii) Explain how you made your choice.

.....

[1]

(d) Outline how, starting with $[\text{Cu}(\text{H}_2\text{O})_6]^{2+}$ in aqueous solution, you could make solutions containing:

(i) $[\text{Cu}(\text{NH}_3)_4(\text{H}_2\text{O})_2]^{2+}$,

.....

(ii) $[\text{CuCl}_4]^{2-}$.

.....

[4]

[Total : 14]

- 2 (a) Complete the electronic configuration of a titanium atom.

$1s^2 2s^2 2p^6$ [1]

- (b) (i) Suggest the shape of the $[\text{Ti}(\text{H}_2\text{O})_6]^{3+}$ ion.

.....[1]

- (ii) Suggest a reason why solutions of $[\text{Ti}(\text{H}_2\text{O})_6]^{3+}$ must be stored in a sealed container.

.....
.....[1]

- (c) (i) Titanium(IV) oxide, TiO_2 , is white whereas titanium(III) chloride, TiCl_3 , is coloured. Suggest an explanation for this difference in colour.

.....
.....
.....
.....[3]

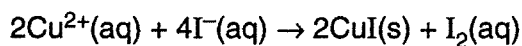
- (ii) State **one** use of TiO_2 .

.....[1]

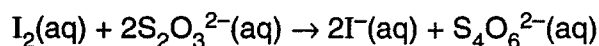
[Total : 7]

3 The following is an account of a laboratory experiment.

- A solution was prepared by dissolving some copper(II) sulphate to give 250 cm³ of aqueous solution.
- 25.0 cm³ of this solution was treated with an excess of aqueous potassium iodide, KI.



- The iodine produced was titrated with 0.100 mol dm⁻³ sodium thiosulphate.



- The average titre obtained was 22.0 cm³ of the thiosulphate solution.

(a) State the oxidation number of S in S₂O₃²⁻.

.....[1]

(b) Calculate the amount of S₂O₃²⁻ ions in the titre.

Answer.....mol [1]

(c) Calculate the amount of I₂ produced.

Answer.....mol [1]

(d) Calculate the amount of Cu²⁺ ions in 25.0 cm³ of solution.

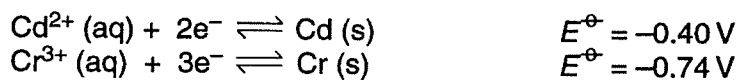
Answer.....mol [1]

(e) Calculate the concentration of the aqueous copper(II) sulphate in mol dm⁻³.

Answer.....mol dm⁻³ [1]

[Total : 5]

- 4 An electrochemical cell was set up based on the following electrode reactions.



- (a) (i) Draw a diagram of this cell working under standard conditions.

[3]

- (ii) Show on the diagram the direction of electron flow in the external circuit.

[1]

- (iii) Explain your answer to (ii).

.....

[2]

- (b) Write a full ionic equation for the reaction taking place in this cell.

.....[1]

- (c) (i) Calculate the standard cell potential of this cell.

[1]

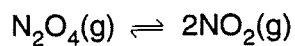
- (ii) When water is added to the chromium half cell, the cell potential changes. Suggest one reason for this observation.

.....[1]

[Total : 9]

Answer **all** questions.

- 1 A chemist set up an equilibrium system between dinitrogen tetroxide, N_2O_4 , and nitrogen dioxide, NO_2 , at 25°C .



The equilibrium concentrations were: $\text{N}_2\text{O}_4(\text{g})$, $0.0390 \text{ mol dm}^{-3}$; $\text{NO}_2(\text{g})$, $0.0150 \text{ mol dm}^{-3}$.

- (a) (i) Write the expression for K_c in this equilibrium system.

[1]

- (ii) Calculate K_c for this equilibrium. State the units.

[2]

- (b) The standard enthalpy changes of formation of N_2O_4 and NO_2 are given below.

compound	$\Delta H_f^\ominus/\text{kJ mol}^{-1}$
N_2O_4	+9
NO_2	+33

Calculate the standard enthalpy change for the forward reaction in this equilibrium.

[2]

- (c) This equilibrium system was heated at constant pressure. How would you expect the relative proportions of N_2O_4 and NO_2 to change? Explain your answer.

change

explanation

.....

.....[3]

- (d) NO_2 and N_2O_4 are both poisonous. After this investigation, the chemist needed to dispose of 0.00465 mol N_2O_4 safely. The chemist decided to do this by reacting the N_2O_4 with an alkali and chose aqueous sodium hydroxide.



Calculate the minimum volume of $0.300 \text{ mol dm}^{-3}$ $\text{NaOH}(\text{aq})$ required to dispose of this amount of N_2O_4 .

[3]

[Total : 11]

- 2 The reaction between hydrogen, H_2 , and nitrogen monoxide, NO , has the following rate equation.

$$\text{rate} = k[\text{H}_2(\text{g})][\text{NO}(\text{g})]^2$$

- (a) Using $6.0 \times 10^{-3} \text{ mol dm}^{-3}$ $\text{H}_2(\text{g})$ and $3.0 \times 10^{-3} \text{ mol dm}^{-3}$ $\text{NO}(\text{g})$, the initial rate of this reaction was $4.5 \times 10^{-3} \text{ mol dm}^{-3} \text{ s}^{-1}$.

Calculate the rate constant, k , for this reaction and state its units.

[3]

- (b) Predict what would happen to the reaction rate after the following changes in concentrations. Show your reasoning.

- (i) The concentration of $\text{H}_2(\text{g})$ is doubled.

effect on rate

reason

.....[2]

- (ii) The concentration of $\text{NO}(\text{g})$ is halved.

effect on rate

reason

.....[2]

- (iii) The concentrations of $\text{H}_2(\text{g})$ and $\text{NO}(\text{g})$ are both tripled.

effect on rate[1]

- (c) The overall equation for the reaction between hydrogen and nitrogen monoxide is shown below.



This reaction takes place by a two step mechanism with the rate-determining step taking place first.

- (i) Explain the term *rate-determining step*.

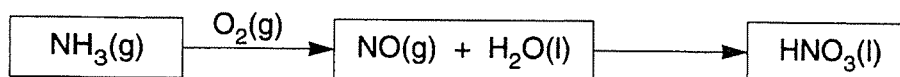
.....
[1]

- (ii) Suggest the two steps for this reaction and write their equations below. The equation for the rate-determining step (RDS) has been partly completed.



[2]

- (d) Each year in the UK, 700 000 tonnes of nitric acid, HNO_3 , are manufactured for the production of fertilisers, dyes, explosives, etc. Nitrogen monoxide, NO , is prepared as an intermediate in the production of nitric acid from ammonia, NH_3 .



- (i) What is the oxidation state of nitrogen in the following?

NH_3

NO

HNO_3 [3]

- (ii) Construct a balanced equation for the formation of $\text{NO}(\text{g})$ from $\text{NH}_3(\text{g})$.

.....[2]

- (iii) Assuming that 1 mol NH_3 produces 1 mol HNO_3 , calculate the mass of NH_3 that is required to meet the annual demand for HNO_3 in the UK.

[2]

[Total : 18]

- 3 Alpha hydroxy acids (AHAs) are monobasic organic acids, used in skin creams to combat the appearance of ageing. Approximately 1% solutions of AHAs remove wrinkles as the low pH aggravates the skin, causing it to swell. More concentrated solutions (approximately 12% or 1.5 mol dm^{-3}) are used to remove dead skin.

(a) An AHA was analysed and had the percentage composition by mass:

C, 40.0%; H, 6.7%; O, 53.3%. $M_r = 90$.

Calculate the molecular formula of this AHA.

[3]

- (b) Calculate the pH of a 1.5 mol dm^{-3} solution of an AHA with an acid dissociation constant, K_a , of $1.2 \times 10^{-5} \text{ mol dm}^{-3}$. Show your working.

[4]

- (c) Beauty treatments often contain buffers. An example of a buffer is a mixture of ethanoic acid, CH_3COOH , and an ethanoate salt such as sodium ethanoate, CH_3COONa .

(i) Explain what is meant by a *buffer solution*.

.....
[1]

(ii) Write the chemical equation for the equilibrium in this buffer system.

.....[1]

(iii) Explain how this buffer solution works. Use equations where appropriate.

.....
.....
.....
.....[3]

(d) A buffer solution was prepared using equal concentrations of CH_3COOH and CH_3COONa .

What would be the effect on the pH of this buffer solution of adding some solid CH_3COONa ? Explain your answer.

effect on pH

explanation

.....
.....[3]

[Total : 15]

